



# INDIAN SCHOOL NIZWA - WORKSHEET


## SUBJECT: MATHEMATICS Chapter – 6. SUBTRACTION UP TO 20

Name: \_\_\_\_\_

Date : \_\_\_\_\_

Class: 1 Sec: \_\_\_\_

### I Subtract by crossing out



$$\boxed{13} - \boxed{4} = \boxed{\phantom{00}}$$



$$\boxed{9} - \boxed{3} = \boxed{\phantom{00}}$$



$$\boxed{15} - \boxed{4} = \boxed{\phantom{00}}$$

### II Subtract by drawing lines and crossing out.

a)

1	5
-	2

b)

1	7
-	8

c)

1	3
-	5

d)

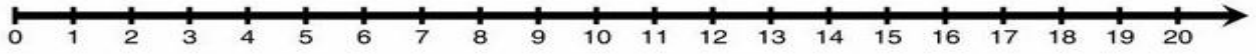
1	9
-	7



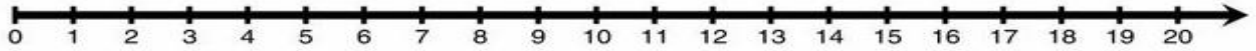
# INDIAN SCHOOL NIZWA - WORKSHEET

## III Subtract on the number line

a)  $17 - 5$



b)  $14 - 7 =$



## IV Subtract by counting backward

a)  $13 - 5 =$

b)  $14 - 4 =$

c)  $17 - 7 =$

d)  $15 - 2 =$

e)  $16 - 9 =$

f)  $18 - 7 =$

## V Subtract by counting backward

a) 

1	9
-	6

b) 

1	5
-	4

c) 

1	7
-	5

d) 

1	8
-	6

## VI Solve the story sum

a) 16 children are playing a game. 7 are boys. How many are girls?

A: \_\_\_\_\_